

Instructor(s): *J. Ipser*

PHYSICS DEPARTMENT

PHY 2004

Final Exam

December 16, 2004

Name (print, last first): _____ Signature: _____

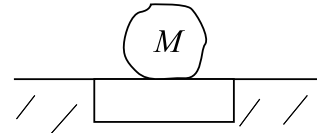
*On my honor, I have neither given nor received unauthorized aid on this examination.***YOUR TEST NUMBER IS THE 5-DIGIT NUMBER AT THE TOP OF EACH PAGE.**

- (1) **Code your test number on your answer sheet (use 76–80 for the 5-digit number).** Code your name on your answer sheet. **DARKEN CIRCLES COMPLETELY.** Code your UFID number on your answer sheet.
- (2) Print your name on this sheet and sign it also.
- (3) Do all scratch work anywhere on this exam that you like. **Circle your answers on the test form.** At the end of the test, this exam printout is to be turned in. No credit will be given without both answer sheet and printout with scratch work most questions demand.
- (4) **Blacken the circle of your intended answer completely, using a #2 pencil or blue or black ink.** Do not make any stray marks or some answers may be counted as incorrect.
- (5) The answers are rounded off. Choose the closest to exact. There is no penalty for guessing.
- (6) **Hand in the answer sheet separately.**

$$g = 9.80 \text{ m/s}^2$$

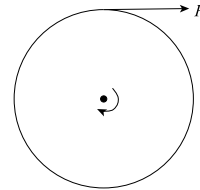
$$\rho_{\text{water}} = 10^3 \text{ kg/m}^3$$

1. A wood block of density $\rho = 0.3 \times 10^3 \text{ kg/m}^3$ floats in water. The mass of the block is 2 kg. A blob of mass M is placed on the block, and the top of the block sinks to the level of the water. What is the value of M ?



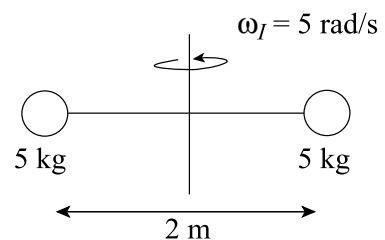
- (1) 4.67 kg (2) 2.35 kg (3) 1 kg (4) 7.98 kg (5) 12 kg

2. A mounted bicycle wheel of mass $M = 2 \text{ kg}$ and radius $R = 0.5 \text{ m}$ is spun up from rest by application of a force $F = 15 \text{ N}$ to its rim as shown. How many revolutions does the wheel make in 10 s?



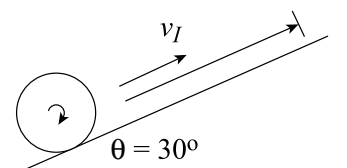
- (1) 120 (2) 10 (3) 20 (4) 50 (5) 75

3. A dumbbell consists of 2 5-kg masses separated from each other by 2 m. The dumbbell is rotating with angular velocity 5 rad/s about an axis through its center as shown. The distance between the masses is suddenly decreased to 0.5 m. What is the resulting kinetic energy of the dumbbell?



- (1) 2000 J (2) 1000 J (3) 6000 J (4) 18,000 J (5) 11,000 J

4. A bicycle tire of mass $M = 2 \text{ kg}$ and radius $R = 0.5 \text{ m}$ is rolling up an incline that makes an angle of 30° with respect to the horizontal. The initial speed of the tire is 4 m/s. How far up the incline (distance along incline) does the tire roll without slipping until its speed drops to 0?



- (1) 3.25 m (2) 4.5 m (3) 1.75 m (4) 7.5 m (5) 9.25 m

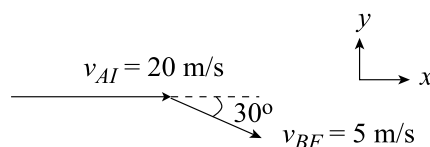
5. A satellite is in orbit around the earth. The radius of the orbit is R_A and the period is 1 day. The satellite is then moved to a new orbit with a period of 2 days. What is the radius of the new orbit?

(1) $1.6R_A$ (2) $3R_A$ (3) $0.5R_A$ (4) $0.1R_A$ (5) $0.75R_A$

6. Ball A of mass 0.2 kg has an elastic collision with ball B. Before the collision, A is moving in the positive x direction with speed 5 m/s. After the collision, A is moving in the negative x direction with speed 9 m/s, and B is moving in the positive x direction with speed 5 m/s. What is the speed of B before the collision?

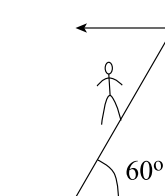
(1) 9 m/s (2) 12 m/s (3) 15 m/s (4) 18 m/s (5) 21 m/s

7. Mass $M_A = 5$ kg has a collision with mass $M_B = 5$ kg. Before the collision, B is at rest and A is moving in the positive x direction at 20 m/s. After the collision, B is moving down at an angle of 30° with respect to the x axis with speed 5 m/s. What is the final speed of A?



(1) 16 m/s (2) 12 m/s (3) 8 m/s (4) 4 m/s (5) 0

8. A uniform ladder of length $L = 5$ m and mass 50 kg leans against a wall at an angle of 60° with respect to the horizontal. A climber of mass 75 kg is standing on the ladder at its mid-point. The force W of the wall on the ladder is horizontal. What is the value of W ?



(1) 355 N (2) 620 N (3) 565 N (4) 720 N (5) 980 N

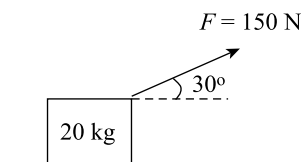
9. An auto accelerates from rest up to a final speed of 30 m/s in 8 s. The radius of its wheels is $\frac{1}{3}$ m and they roll without slipping. What is the angular velocity of the wheels in rad/s once the auto reaches its final speed?

(1) 90 (2) 80 (3) 60 (4) 40 (5) 20

10. A lady of mass $M = 50$ kg stands on a scale in an elevator. The elevator is moving up at a speed of 8 m/s and its speed is decreasing at the rate of 4 m/s². What is the reading on the scale for the lady's weight?

(1) 290 N (2) 140 N (3) 350 N (4) 420 N (5) 760 N

11. A 20-kg block starts from rest and is pulled across a horizontal surface by a force of 150 N that is directed 30° above the horizontal. The force of friction is 50 N. What is the block's speed, in m/s, after it has been pulled through a distance 15 m?

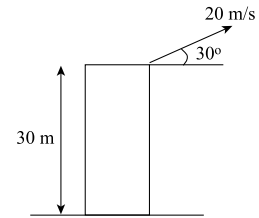


(1) 11 m/s (2) 12 m/s (3) 8 m/s (4) 4 m/s (5) 0

12. An elevator of mass 10^3 kg is lowered from rest through a vertical distance of 20 m and is then raised through a vertical distance of 10 m, at which point its speed is 4 m/s. How much work is done by the elevator motor during this process?

(1) -9×10^4 J (2) -5×10^4 J (3) 0 (4) $+5 \times 10^4$ J (5) $+15 \times 10^4$ J

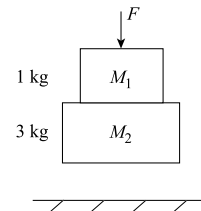
13. A ball is thrown up from height 30 m at an angle of 30° above the horizontal, with initial speed 20 m/s. How long is the ball in the air before it returns to its original height?



- (1) 2 s (2) 1 s (3) 3 s (4) 4 s (5) 5 s
14. An auto slows at a constant rate from 40 m/s to rest in 10 s. How far does the auto travel during this slowing process?
- (1) 200 m (2) 250 m (3) 300 m (4) 350 m (5) 400 m
15. A rifle bullet is fired from ground level at 750 m/s and travels a horizontal distance of 2000 m before returning to the ground. At what angle above the horizontal is the bullet shot? Neglect air friction.

- (1) 1° (2) 4° (3) 8° (4) 20° (5) 30°

16. Two masses of mass $M_1 = 1$ kg and $M_2 = 3$ kg are glued together and move above Earth. A vertically downward force of $F = 100$ N is applied to M_1 . What is the force of M_1 on M_2 .



- (1) 75 N (2) 25 N (3) 50 N (4) 100 N (5) 125 N