

Student ID Number: _____

PRELIMINARY EXAMINATION

DEPARTMENT OF PHYSICS

UNIVERSITY OF FLORIDA

Part B, August, 2017, 14:00–17:00

Instructions

1. You may use a calculator and CRC Math tables or equivalent. No other tables or aids are allowed or required. You may **NOT** use programmable calculators to store formulae.
 - (a) All of the problems will be graded and will be tabulated to generate a final score. Therefore, you should submit work for all of the problems.
 - (b) For convenience in grading please write legibly, use only one side of each sheet of paper, and work different problems on separate sheets of paper. The sheets for each problem will be stapled together but separately from the other two problems.
 - (c) Your assigned student **ID Number**, the **Problem Number**, and the **Page Number** should appear in the upper right hand corner of each sheet. Do **NOT** use your name anywhere on the Exam.
 - (d) All work must be shown to receive full credit. Work must be clear and unambiguous. Be sure that you hand your completed work to the Proctor.
 - (e) Each problem is worth 10 points.
 - (f) Following the UF Honor Code, your work on this examination must reflect your own independent effort, and you must not have given, nor received, any unauthorized help or assistance. If you have any questions, ask the Proctor.

University of Florida Honor Code: We, the members of the University of Florida community, pledge to hold ourselves and our peers to the highest standards of honesty and integrity. On all work submitted for credit by students at the University of Florida, the following pledge is either required or implied: *“On my honor, I have neither given nor received unauthorized aid in doing this assignment.”*

DO NOT OPEN EXAM UNTIL INSTRUCTED

PRELIMINARY EXAMINATION

DEPARTMENT OF PHYSICS

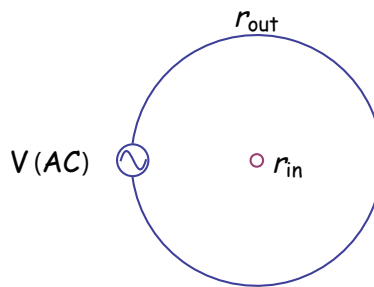
UNIVERSITY OF FLORIDA

Part B, August, 2017, 14:00–17:00

- B1. **(Saab)** Two concentric loops have radii r_{in} and r_{out} , with $r_{in} \ll r_{out}$. The loops are made from a wire which has a resistance per unit length of ρ . If an AC voltage is applied to the outer loop given by: $V_{out}(t) = \mathcal{E}_0 \sin(\omega t)$.

Note 1: You can assume that the self-inductance of the loops is small i.e. $R_{loop} \gg \omega L_{loop}$

Note 2: If you do not know/recall the specific numerical factors for the various terms in the solution, at least express your answer in terms of the appropriate powers of the provided physical variables such as $r_{out}, r_{in}, \rho, \dots$



- (a) **[6 points]** What is the amplitude of the induced current in the inner loop? (Hint: Use the fact that $r_{in} \ll r_{out}$ to simplify the determination of the magnetic flux Φ_B in the inner loop.)
- (b) **[2 points]** At a given moment in time, in what direction is the instantaneous current in the inner loop with respect to the current in the outer loop?
- (c) **[2 points]** If the outer loop is rotated by 90° along an axis that passes through the diameter of the loop, what is the new amplitude of the induced current in the inner loop?

PRELIMINARY EXAMINATION

DEPARTMENT OF PHYSICS

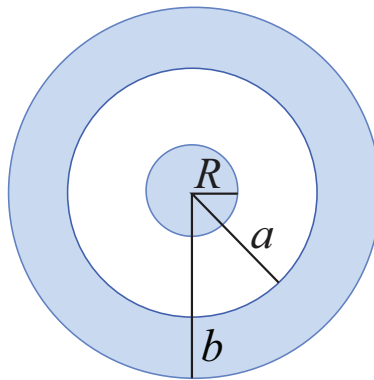
UNIVERSITY OF FLORIDA

Part B, August, 2017, 14:00–17:00

B2. (**Acosta**) A non-conducting sphere of radius R carries a charge density

$$\rho = \frac{\rho_0}{r}$$

in the region $r \leq R$, where ρ_0 is a positive constant and r is the distance from the center of the sphere (see figure). The sphere is surrounded by a thick, concentric metal shell with an inner radius a and an outer radius b . The shell carries no net charge.



- (a) [**2 points**] Find the surface charge densities at the inner and the outer surfaces of the conductor.
- (b) [**4 points**] Find the electric field \vec{E} in all four regions (i) $r < R$, (ii) $R < r < a$, (iii) $a < r < b$, and (iv) $r > b$
- (c) [**3 points**] Find the potential V at the center of the sphere using infinity ($r = \infty$) as a reference point.
- (d) [**1 point**] If the outer shell is grounded, what would be the potential at the center of the sphere using the same reference point? as in (c)?

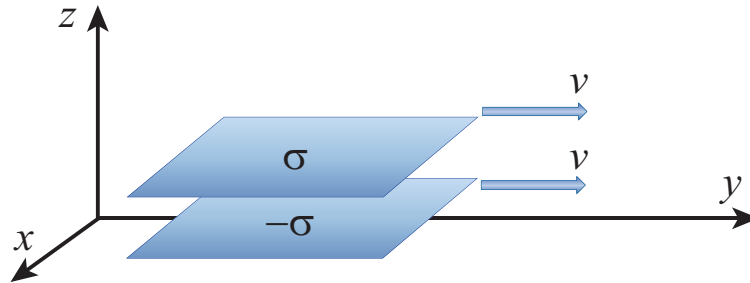
PRELIMINARY EXAMINATION

DEPARTMENT OF PHYSICS

UNIVERSITY OF FLORIDA

Part B, August, 2017, 14:00–17:00

- B3. (**Matcheva**) A very large parallel-plate capacitor with uniform surface charge σ on the upper plate and $-\sigma$ on the lower plate is moving with a constant speed v , as shown in the figure. The distance between the plates is much smaller than the size of the plates.



- (a) [**4 points**] Find the magnetic field (magnitude and direction) between the plates and also above and below them.
- (b) [**3 points**] Find the magnetic force per unit area acting on the top plate, including its direction.
- (c) [**3 points**] At what speed v would the magnetic force balance the electric force?